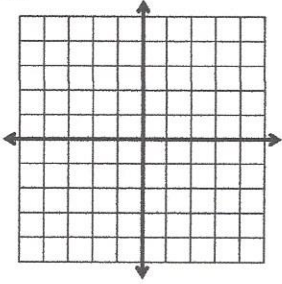


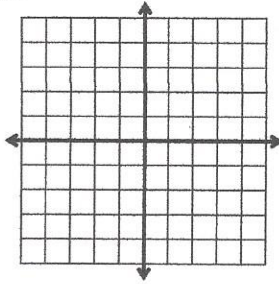
# Graph the equation.

1.



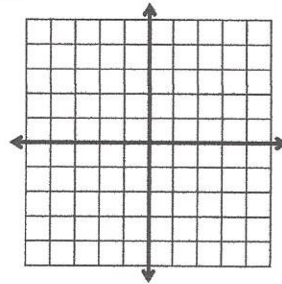
$$y = |x|$$

2.



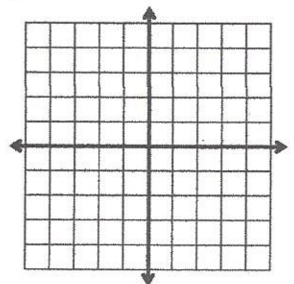
$$y = |x+2|$$

3.



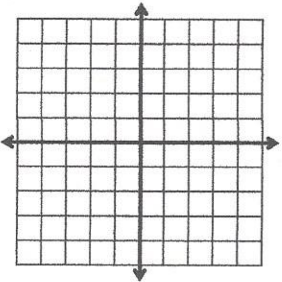
$$y = -|x|$$

4.



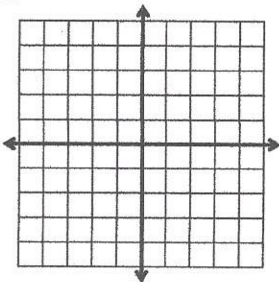
$$y = 2|x|$$

5.



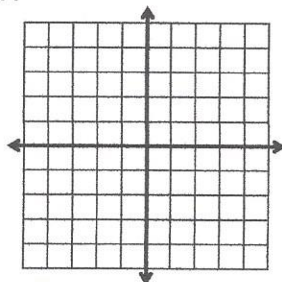
$$y = |x| - 2$$

6.



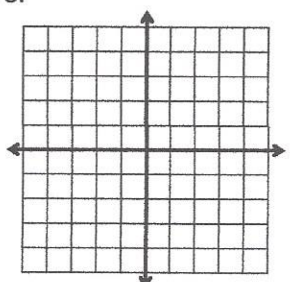
$$y = |x| + 2$$

7.



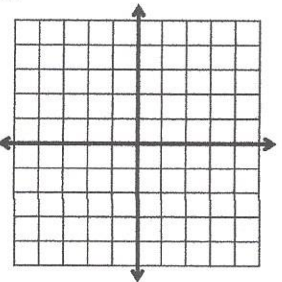
$$y = 2|x-2| + 1$$

8.



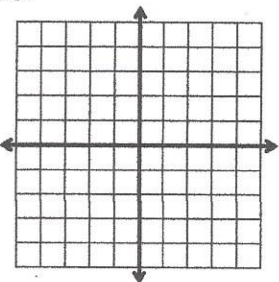
$$y = |x-2|$$

9.



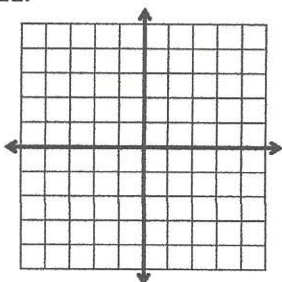
$$y = -\frac{1}{2}|x-2| - 1$$

10.



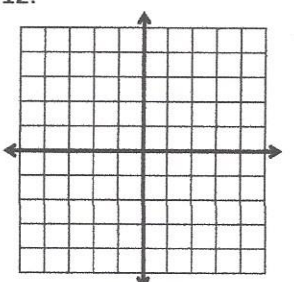
$$y = -|x| - 2$$

11.



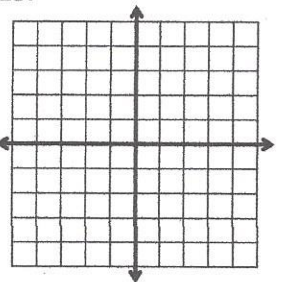
$$y = -|x-3| - 1$$

12.



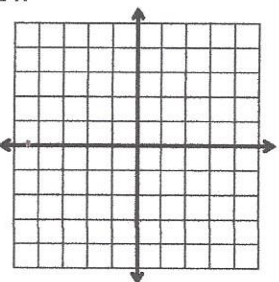
$$y = -|x+2| + 2$$

13.



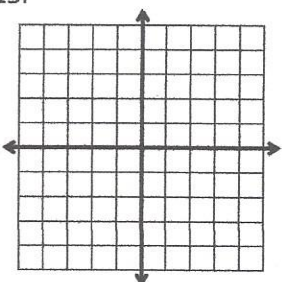
$$y = -|x-2| + 3$$

14.



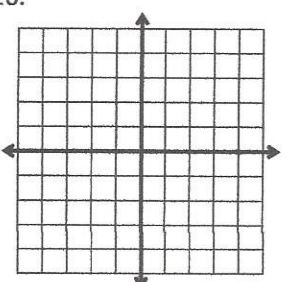
$$y = -\frac{1}{2}|x+2| - 1$$

15.



$$y = |x+2| + 1$$

16.



$$y = \frac{1}{2}|x|$$