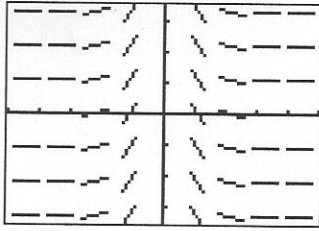
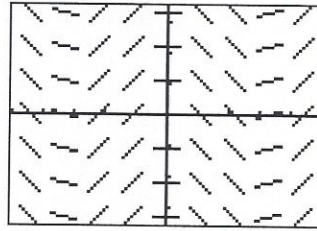


Match each slope field with the equation that the slope field could represent.

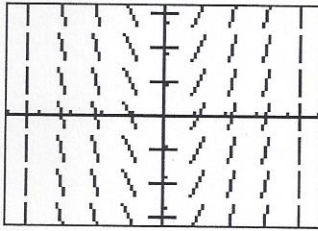
(A)




(B)



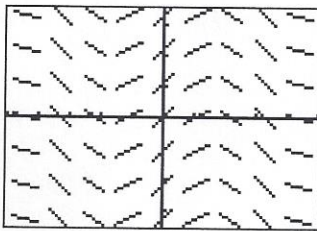
(C)



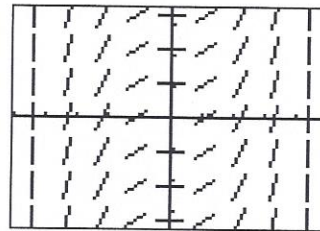
(D)



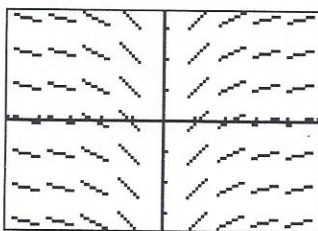
(E)



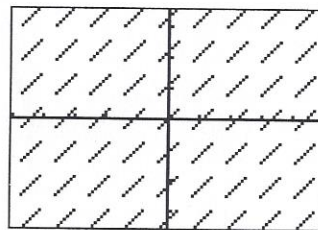
(F)



(G)



(H)



7. $y = 1$

11. $y = \frac{1}{x^2}$

8. $y = x$

12. $y = \sin x$

9. $y = x^2$

13. $y = \cos x$

10. $y = \frac{1}{6}x^3$

14. $y = \ln|x|$